
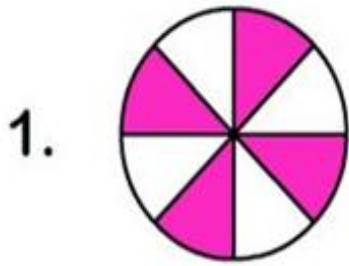


Επανάληψη στα Κλάσματα

1^ο Φύλλο Εργασίας




1. Τι μέρος του όλου είναι χρωματισμένο; Διάβασε δυνατά τα κλάσματα και κύκλωσε το σωστό:



$$\frac{3}{6}$$

$$\frac{3}{5}$$

$$\frac{4}{8}$$



$$\frac{4}{5}$$

$$\frac{1}{3}$$

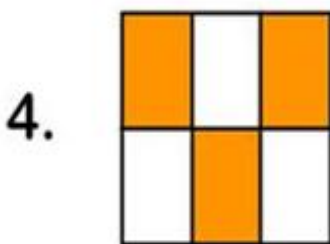
$$\frac{3}{4}$$



$$\frac{5}{6}$$

$$\frac{3}{7}$$

$$\frac{1}{8}$$

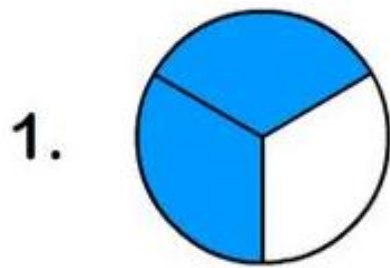


$$\frac{2}{7}$$

$$\frac{4}{8}$$

$$\frac{3}{6}$$


2. Κάνε το ίδιο και εδώ:



$$\frac{3}{4}$$

$$\frac{2}{3}$$

$$\frac{1}{4}$$



$$\frac{3}{4}$$

$$\frac{1}{5}$$


$$\frac{2}{3}$$



$$\frac{2}{4}$$

$$\frac{4}{5}$$

$$\frac{5}{6}$$



$$\frac{4}{8}$$

$$\frac{1}{3}$$

$$\frac{1}{2}$$

3. Κάνε την αντιστοίχιση:



$$\frac{1}{4}$$

$$\frac{2}{6}$$













$$\frac{2}{7}$$

$$\frac{4}{5}$$

$$\frac{2}{3}$$

$$\frac{3}{4}$$

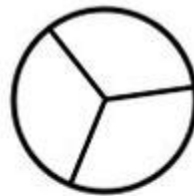
4. Γράψε το μέρος του κύκλου που είναι χρωματισμένο.
Χρωμάτισε τον πρώτο κύκλο:

	$\frac{1}{5}$		—
	—		—
	—		—
	—		—
	—		—
	—		—

5. Διάβασε δυνατά τα κλάσματα και χρωμάτισε αυτό που λέει το κάθε κλάσμα:




$$\frac{1}{2}$$



$$\frac{1}{3}$$




$$\frac{3}{6}$$




$$\frac{2}{4}$$



$$\frac{2}{5}$$



$$\frac{5}{6}$$




$$\frac{3}{4}$$




$$\frac{3}{5}$$



$$\frac{2}{3}$$



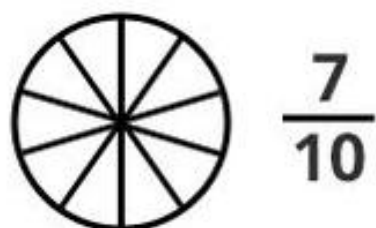
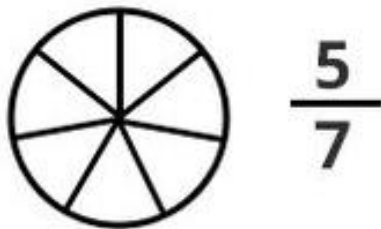

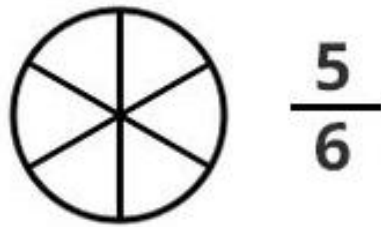
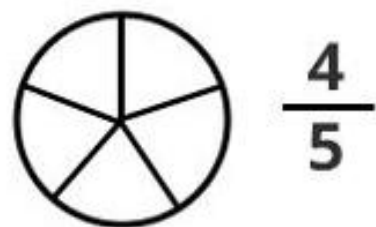
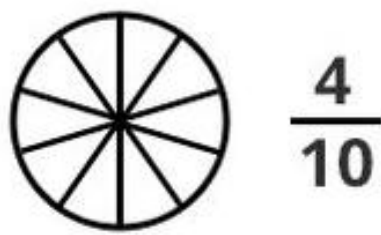
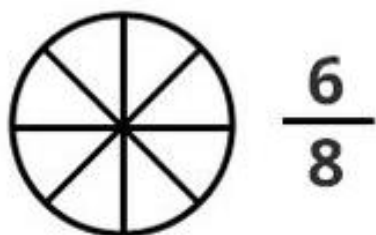
$$\frac{4}{6}$$



$$\frac{1}{4}$$



$$\frac{4}{5}$$



edufichas.com

